

Homework Y6 wb 6.5.24

If $a = 10$ and $b = 6$, work out the values of the expressions.

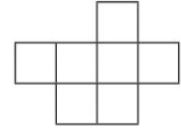
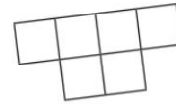
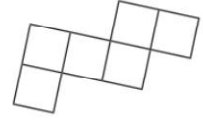
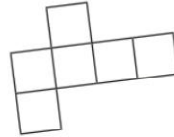
a) $a + b =$

d) $2a + b =$

b) $a - b =$

e) $3a - 17 =$

Tick the nets that will make a cube.



Writing

Spend 5 minutes describing the picture below in as much detail as possible. Try to create a tense atmosphere.



Reading

In a forgotten corner of the woods, hidden behind gnarled trees and overgrown bushes, stands an eerie abandoned house. Its windows are like empty eyes, staring out at the world with a haunting gaze. Ivy snakes up the walls, clinging to the faded paint as if reluctant to let go. The creaky front door hangs off its hinges, inviting brave souls to step inside and uncover its secrets. Shadows dance across the dusty floors, whispering tales of the past to anyone who dares to listen. The air is heavy with a sense of mystery, as if the house itself holds its breath, waiting for someone to break the silence.

1. How does the author describe the windows of the abandoned house?
2. What is growing on the walls of the house?
3. What does the front door look like?
4. How does the author create a sense of mystery in the description?
5. Why do you think the author chose words like "gnarled" and "haunting" to describe the setting?

SPAG

Tick the **adverb** in the sentence below.

Tick **one**.

The lively crowd cheered loudly when the rally car race began.

↑

↑

↑

↑

Insert a **pair of commas** in the correct place in the sentence below.

My father who works at the museum gave my class a
guided tour.

Spelling

Try to learn the following words below:

- 1) Imagination
- 2) Competition
- 3) Surface
- 4) Incredible
- 5) Excellent
- 6) Reign